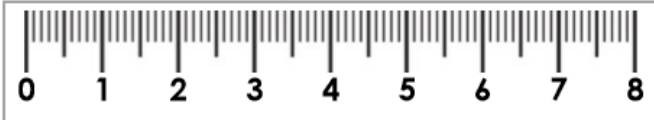


## Measure Length 2

4a. Lucas thinks his toy car measures 3cm.



Explain the mistake he has made.



R

## Measure Length 2

4b. Rosie thinks her toy truck measures 8cm.



Explain the mistake she has made.



R

5a. Whose pencil is being measured?

My pencil is less than 5cm long.

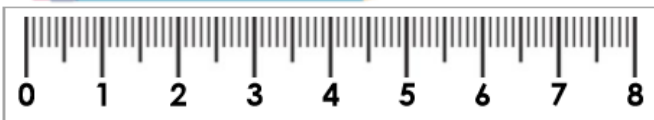


Reggie



Kat

My pencil is greater than 4cm long.



PS

5b. Whose pen is being measured?

My pencil is greater than 5cm long.



Max



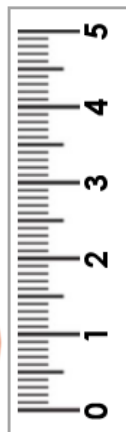
Tim

My pencil is less than 6cm long.



PS

6a. Sanjit thinks the melon is taller than the apple.



Is he correct? Explain your answer.



R

6b. Nancy thinks the pear is taller than the carrot.



Is she correct? Explain your answer.



R