


Making Doubles

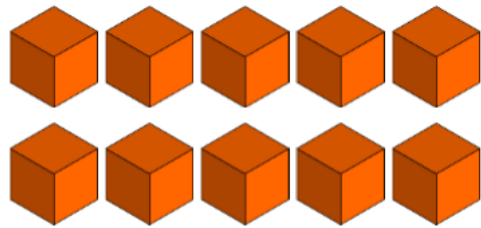
5a. What is the double of these objects?



VF

Making Doubles

5b. What is the double of these objects?



VF

6a. Complete the missing doubles from this table.

Double 6	12
Double 8	
Double 10	20
Double 7	



VF


6b. Complete the missing doubles from this table.

Double 9	
Double 6	12
Double 8	16
Double 10	




VF

7a. Match the doubles using these pictures.



VF

7b. Match the doubles using these pictures.



VF

8a. Complete these number sentences.

Double 5 is ____.



Double ____ is 12.



VF

8b. Complete these number sentences.

Double 7 is ____.



Double ____ is 16.



VF