


Tens and ones

Complete the tens and ones grids. The first one has been completed for you.

24	2 tens 4 ones	
----	------------------	---

32		
----	--	--

50		
----	--	--

17		
----	--	--

36		
----	--	--


41		
----	--	--

19		
----	--	--

33		
----	--	--


	3 tens 9 ones	
--	------------------	--

		
--	--	---

		
--	--	---

	1 ten 4 ones	
--	-----------------	--

	2 tens 8 ones	
--	------------------	--

		
--	--	---